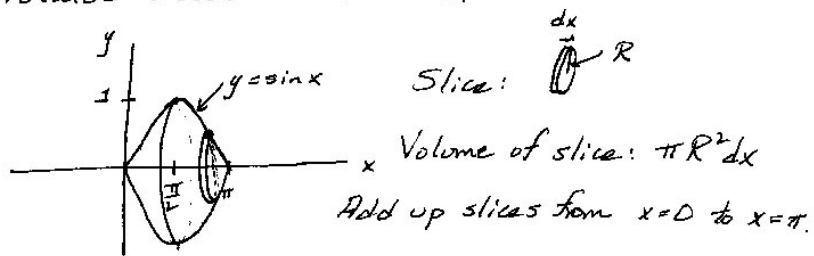


MATH 221 Lecture 29, November 15, 2000

①

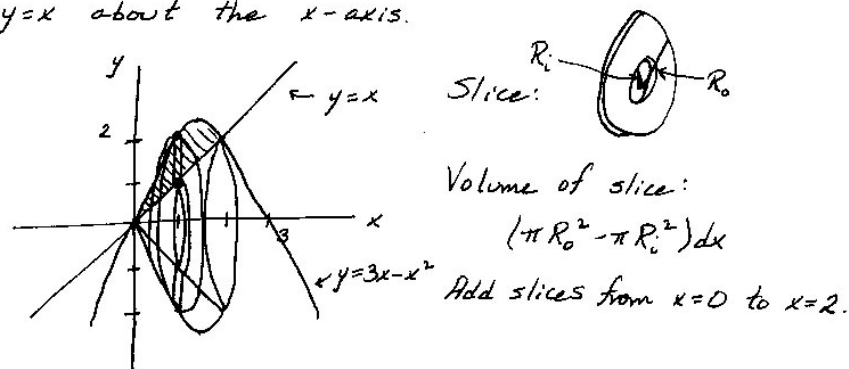
Example Find the volume generated when the area bounded by  $y = \sin x$ ,  $0 \leq x \leq \pi$ , and  $y = 0$  is rotated about the  $x$ -axis.



$$\begin{aligned} \int_{x=0}^{x=\pi} \pi R^2 dx &= \int_{x=0}^{x=\pi} \pi y^2 dx = \int_{x=0}^{x=\pi} \pi \sin^2 x dx \\ &= \int_{x=0}^{x=\pi} \frac{\pi}{2} (\sin^2 x + \sin^2 x) dx = \int_{x=0}^{x=\pi} \frac{\pi}{2} (\sin^2 x + 1 - \cos^2 x) dx \\ &= \int_{x=0}^{x=\pi} \frac{\pi}{2} (1 - (\cos^2 x - \sin^2 x)) dx = \int_{x=0}^{x=\pi} \frac{\pi}{2} (1 - \cos 2x) dx \\ &= \frac{\pi}{2} \left( x - \frac{\sin 2x}{2} \right) \Big|_{x=0}^{x=\pi} = \frac{\pi}{2} \left( \pi - \frac{\sin 2\pi}{2} \right) - \frac{\pi}{2} \left( 0 - \frac{\sin 0}{2} \right) \\ &= \frac{\pi}{2} (\pi - 0) = \frac{\pi^2}{2} \end{aligned}$$

②

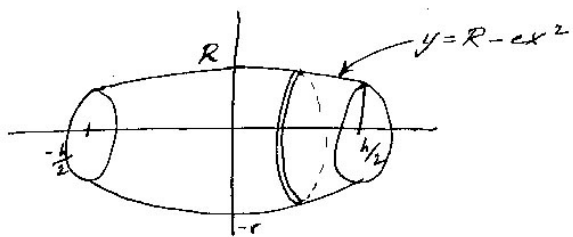
Example Find the volume generated by rotating the area bounded by the curves  $y = 3x - x^2$  and  $y = x$  about the  $x$ -axis.



$$\begin{aligned} \int_{x=0}^{x=2} (\pi R_o^2 - \pi R_i^2) dx &= \int_{x=0}^{x=2} (\pi y_{\text{top}}^2 - \pi y_{\text{bottom}}^2) dx \\ &= \int_{x=0}^{x=2} (\pi (3x - x^2)^2 - \pi x^2) dx = \int_{x=0}^{x=2} \pi (9x^2 - 6x^3 + x^4 - x^2) dx \\ &= \int_{x=0}^{x=2} \pi (8x^2 - 6x^3 + x^4) dx = \pi \left( \frac{8x^3}{3} - \frac{6x^4}{4} + \frac{x^5}{5} \right) \Big|_{x=0}^{x=2} \\ &= \pi \left( \frac{8 \cdot 8}{3} - \frac{6 \cdot 2^4}{4} + \frac{2^5}{5} \right) - \pi (0 - 0 + 0) = \pi 2^5 \left( \frac{2}{3} - \frac{3}{4} + \frac{1}{5} \right) \\ &= 32\pi \left( \frac{40}{60} - \frac{45}{60} + \frac{12}{60} \right) = \frac{32\pi \cdot 7}{60} = \frac{8 \cdot 7 \pi}{15} = \frac{56\pi}{15} \end{aligned}$$

②

Example A barrel of height  $h$  and maximum radius  $R$  is constructed by rotation of the parabola  $y = R - cx^2$ ,  $-\frac{h}{2} \leq x \leq \frac{h}{2}$ .



Volume of a slice  is  $\pi y^2 dx$

Add up slices from  $x = -\frac{h}{2}$  to  $\frac{h}{2}$

$$\int_{x=-\frac{h}{2}}^{x=\frac{h}{2}} \pi y^2 dx = \int_{x=-\frac{h}{2}}^{x=\frac{h}{2}} \pi (R - cx^2)^2 dx$$

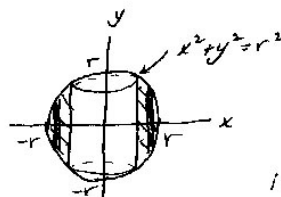
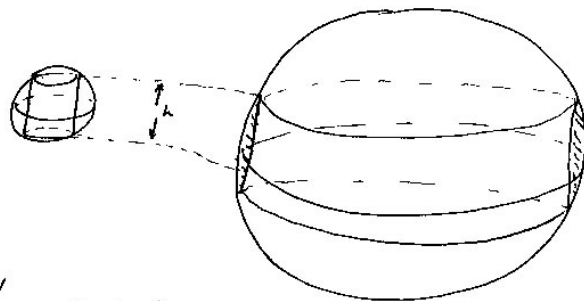
$$= \int_{x=-\frac{h}{2}}^{x=\frac{h}{2}} \pi (R^2 - 2cRx^2 + c^2x^4) dx = \pi \left( R^2x - 2cR \frac{x^3}{3} + \frac{c^2x^5}{5} \right) \Bigg|_{x=-\frac{h}{2}}^{x=\frac{h}{2}}$$

$$= \pi \left( R^2 \frac{h}{2} - \frac{2cR}{3} \frac{h^3}{8} + \frac{c^2}{5} \frac{h^5}{2^5} \right) - \pi \left( R^2 \left( -\frac{h}{2} \right) + \frac{2cR}{3} \frac{h^3}{2^3} + \frac{(-c^2)h^5}{5 \cdot 2^5} \right)$$

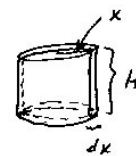
$$= \pi \left( R^2 h - \frac{4cRh^3}{3 \cdot 8} + \frac{2c^2h^5}{5 \cdot 2^5} \right) = \pi \left( R^2 h - \frac{cRh^3}{6} + \frac{c^2h^5}{5 \cdot 16} \right)$$

③

Example You are given two spherical balls of wood, one of radius  $r$  and a second one of radius  $R$ . A circular hole is bored through each ball and the resulting napkin rings have height  $h$ . Which napkin ring contains more wood?



Volume of a slice



is  $2\pi x H dx$ .

Add slices from  $x = \sqrt{r^2 - (\frac{h}{2})^2}$  to  $x = r$ .

$$\int_{x=\sqrt{r^2 - \frac{h^2}{4}}}^{x=r} 2\pi x \cdot 2y dx = \int_{x=\sqrt{r^2 - \frac{h^2}{4}}}^{x=r} 4\pi x \sqrt{r^2 - x^2} dx$$

$$= \int_{x=\sqrt{r^2 - \frac{h^2}{4}}}^{x=r} (-2\pi) (-2x) (r^2 - x^2)^{\frac{1}{2}} dx = -2\pi (r^2 - x^2)^{\frac{3}{2}} \frac{2}{3} \Bigg|_{x=\sqrt{r^2 - \frac{h^2}{4}}}^{x=r}$$

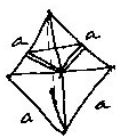
$$= -2\pi(r^2 - r^2)^{\frac{3}{2}} \frac{2}{3} - (-2\pi)(r^2 - (r^2 - \frac{h^2}{4}))^{\frac{3}{2}} \frac{2}{3}$$

$$= 0 + 2\pi(\frac{h^2}{4})^{\frac{3}{2}} \frac{2}{3} = 2\pi(\frac{h}{2})^3 \frac{2}{3} = \frac{4\pi}{3} \frac{h^3}{8} = \frac{\pi h^3}{8}$$

This doesn't depend on  $r$ !!

So both napkin rings contain the same amount of wood.

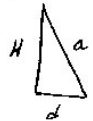
Example Find the volume of a tetrahedron where each side of the tetrahedron is an equilateral triangle with side length  $a$ .



Volume of a slice  $\frac{s^2}{2} dy$

is  $\frac{dy(\text{base})(\text{height})}{2} = \frac{(\frac{1}{2}s)(\frac{\sqrt{3}}{2}s)}{2} dy$

Add up slices from  $y=0$  to  $y=(\text{height of tetrahedron}) = H$



$$\frac{1}{2}a = \cos 30^\circ = \frac{\sqrt{3}}{2} d$$

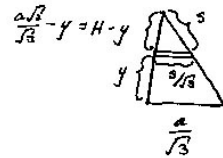
$$\text{So } d = \frac{\frac{1}{2}a}{\frac{\sqrt{3}}{2}} = \frac{a}{\sqrt{3}}$$

$$\text{So } H = \sqrt{a^2 - \left(\frac{a}{\sqrt{3}}\right)^2} = \sqrt{a^2 - \frac{a^2}{3}}$$

$$= \sqrt{\frac{2a^2}{3}} = a \frac{\sqrt{2}}{\sqrt{3}}$$

So we want

$$2 \int_{y=0}^{y=H} \frac{(\frac{1}{2}s)(\frac{\sqrt{3}}{2}s)}{2} dy = \int_{y=0}^{y=H} 2 \frac{\sqrt{3}}{8} s^2 dy$$



But  $H-y = \frac{\sqrt{3}}{3} s$

So  $y = H - \frac{\sqrt{3}}{3} s$

So  $\frac{dy}{ds} = -\frac{\sqrt{3}}{3}$

$$\int_{y=0}^{y=H} 2 \frac{\sqrt{3}}{8} s^2 dy = \int_{y=0}^{y=H} 2 \frac{\sqrt{3}}{8} s^2 \frac{dy}{ds} ds = \int_{y=0}^{y=H} 2 \frac{\sqrt{3}}{8} s^2 \left(-\frac{\sqrt{3}}{3}\right) ds$$

$$= 2 \frac{\sqrt{3}}{8} \frac{s^3}{3} \left(-\frac{\sqrt{3}}{3}\right) \Big|_{y=0}^{y=H} = -\frac{\sqrt{3} \cdot 2}{8 \cdot 3} s^3 \Big|_{s=0}^{s=a}$$

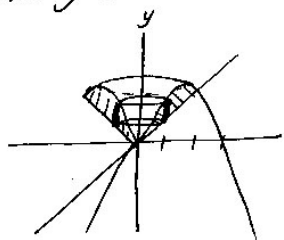
$$= \left(-\frac{\sqrt{3} \cdot 2}{8 \cdot 3} a^3\right) - \left(-\frac{\sqrt{3} \cdot 2}{8 \cdot 3} 0^3\right) = \frac{\sqrt{3} \cdot 2}{24} a^3 = \frac{\sqrt{3}}{12} a^3$$

Since  $H = \frac{a\sqrt{2}}{\sqrt{3}}$  we can also write this as

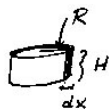
$$\frac{\sqrt{3}}{12} a^3 = \left(\frac{\sqrt{2}}{\sqrt{3}} a\right) \frac{\sqrt{3}}{12} a^2 = \frac{H \sqrt{3} a^2}{12} = \frac{\sqrt{3} a^2 H}{12}$$

⑤

Example Find the volume generated by rotating the area bounded by  $y=3x-x^2$  and  $y=x$  about the y-axis.



Volume of a slice



is  $2\pi R H dx$

Add slices from  $x=0$  to  $x=2$ .

$$\int_{x=0}^{x=2} 2\pi R H dx = \int_{x=0}^{x=2} 2\pi x (\text{Upper} - \text{Lower}) dx$$

$$= \int_{x=0}^{x=2} 2\pi x (3x - x^2 - x) dx = \int_{x=0}^{x=2} 2\pi x (2x - x^2) dx$$

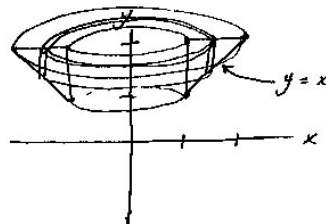
$$= \int_{x=0}^{x=2} 2\pi (2x^2 - x^3) dx = 2\pi \left( \frac{2x^3}{3} - \frac{x^4}{4} \right) \Big|_{x=0}^{x=2}$$

$$= 2\pi \left( \frac{2}{3} \cdot 8 - \frac{16}{4} \right) - 2\pi (0 - 0) = 2\pi \left( \frac{16}{3} - \frac{16}{4} \right)$$

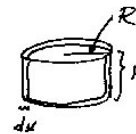
$$= 2\pi \cdot 16 \left( \frac{1}{3} - \frac{1}{4} \right) = \frac{32\pi}{12} = \frac{16\pi}{6} = \frac{8\pi}{3}$$

⑥

Example Find the volume generated by revolving the triangle with vertices  $(1,1)$ ,  $(1,2)$  and  $(2,2)$  about the y-axis.



Volume of a slice



is  $2\pi R H dx$

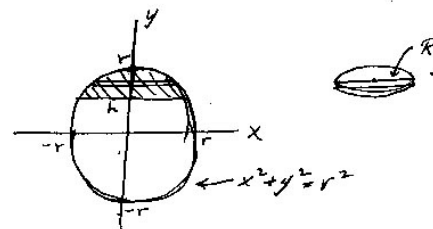
Add slices from  $x=1$  to  $x=2$ .

$$\int_{x=1}^{x=2} 2\pi R H dx = \int_{x=1}^{x=2} 2\pi x (2-x) dx = \int_1^2 2\pi (2x - x^2) dx$$

$$= 2\pi \left( x^2 - \frac{x^3}{3} \right) \Big|_{x=1}^{x=2} = 2\pi \left( 4 - \frac{8}{3} \right) - 2\pi \left( 1 - \frac{1}{3} \right)$$

$$= 2\pi \left( \frac{4}{3} \right) - 2\pi \left( \frac{2}{3} \right) = \frac{4\pi}{3}$$

Example Find the volume of a slice obtained by chopping off the end of a sphere of radius  $r$ , if the slice has thickness  $h$  (at its thickest point).



Volume of a slice  is  $\pi R^2 dy$

(7)

~ Add slices from  $y=h$  to  $y=r$

$$\int_{y=h}^{y=r} \pi R^2 dy = \int_{y=h}^{y=r} \pi x^2 dy = \int_{y=h}^{y=r} \pi (r^2 - y^2) dy$$

$$= \pi \left( r^2 y - \frac{y^3}{3} \right) \Big|_{y=h}^{y=r} = \pi \left( r^3 - \frac{r^3}{3} \right) - \pi \left( r^2 h - \frac{h^3}{3} \right)$$

$$= \frac{\pi}{3} r^3 - \pi r^2 h + \frac{\pi h^3}{3} = \frac{\pi}{3} (2r^3 - 3r^2 h + h^3).$$